

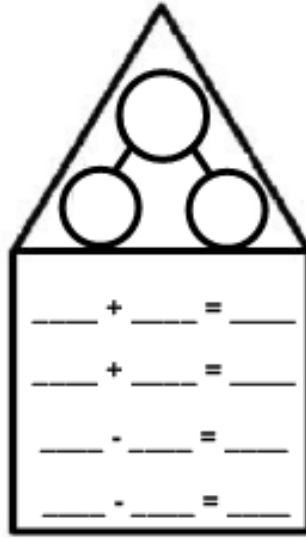



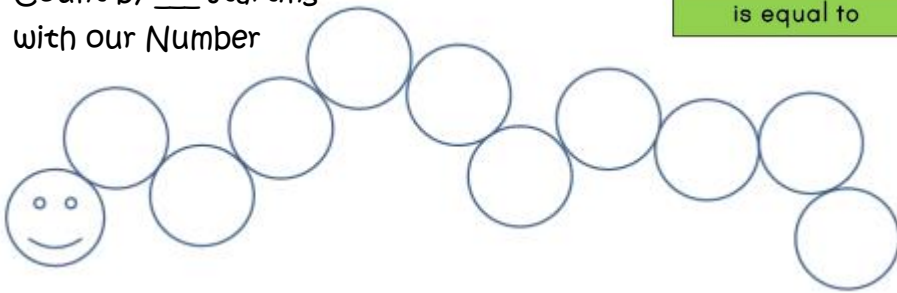


Number Bonds and Fact Families

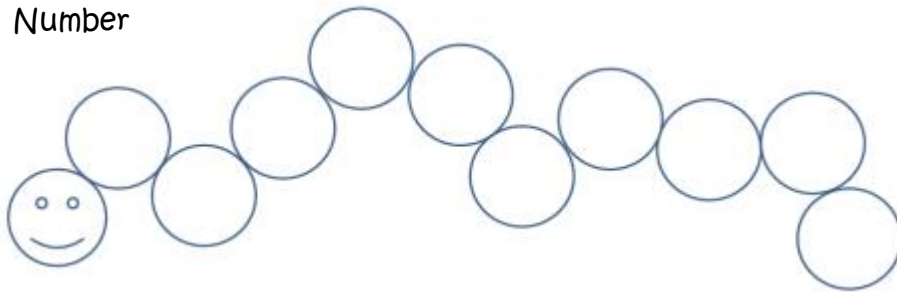
Show with Money
2 different ways



Count by ___ starting
with our Number



Count by ___
starting with our
Number



Add 100	
Add 200	
Add 300	
Add 1000	
Add 2000	

How many Thousands	How many Hundreds	How many Tens	How many Ones
_____	_____	_____	_____
_____	_____	_____	_____

Place Value

Thousands	Hundreds	Tens	Ones

Expanded Form

$$\square + \square + \square + \square = \square$$

