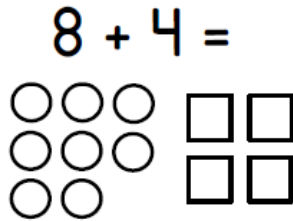


Day 1: 1.OA.1 & 6 Addition within 20 using Pictures or Tallies

1. Use the picture to help you solve:

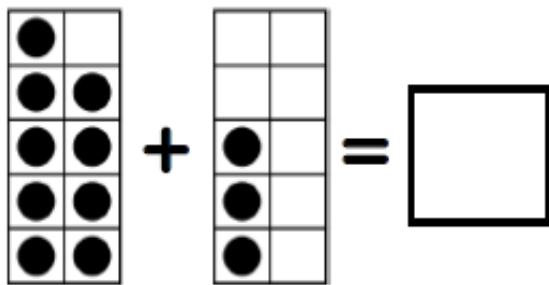


2. Draw a picture to help you solve:

$7 + 6 =$

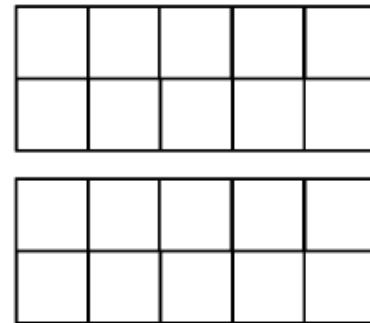
Day 2: 1.OA.1 & 6 Addition within 20 using Ten Frames

1. Use the 10 frame to solve the problem:



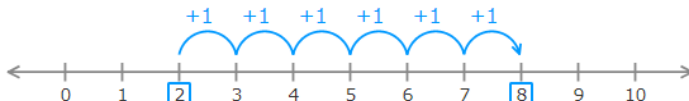
2. Color the ten frames to solve the problem below:

$7 + 4 = \underline{\quad}$



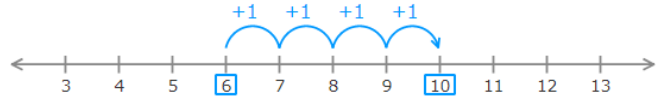
Day 3: 1.OA.1 & 6 Addition within 20 using a Number Line

1. Which addition sentence does this model show?



- a. $2 + 7 = 9$
- b. $2 + 6 = 8$
- c. $1 + 6 = 7$
- d. $0 + 8 = 8$

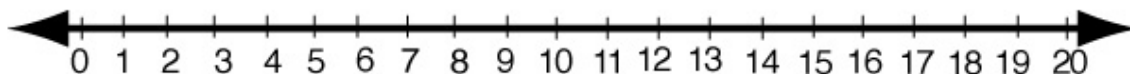
2. Which addition sentence does this model show?



- a. $6 + 10 = 4$
- b. $10 + 6 = 4$
- c. $6 + 4 = 10$
- d. $0 + 10 = 10$

Day 4: 1.OA.1 & 6 Addition within 20 using a Number Line -- Show your work on the number line for each question.

1. Kate has 9 stickers. Drew gave her 6 more. How many stickers does Kate have now?



2. Ms. Luckey has 6 sharpened pencils. She sharpened 5 more. How many sharpened pencils does she have now?

