



Tally Marks

EVEN or ODD

Place Value

Hundreds	Tens	Ones


$\underline{\quad} + \underline{\quad} = \underline{\quad}$
 $\underline{\quad} + \underline{\quad} = \underline{\quad}$
 $\underline{\quad} - \underline{\quad} = \underline{\quad}$
 $\underline{\quad} - \underline{\quad} = \underline{\quad}$


Combinations – what do you see?

Expanded Form


$$\square + \square + \square = \square$$

Add 10	
Add 20	
Subtract 10	
Subtract 20	
Add 100	
Add 200	

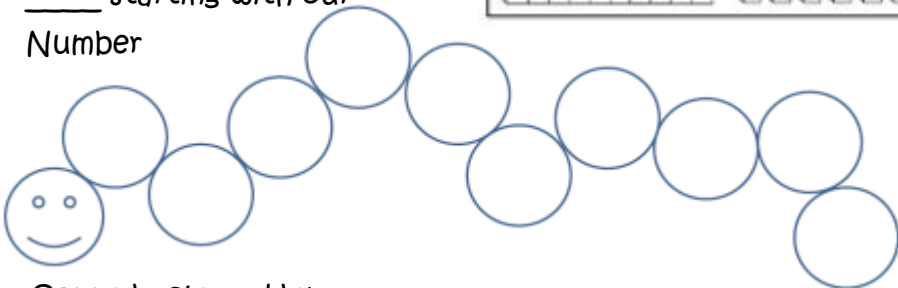

 is equal to




Show with Place Value Blocks



Count forward by _____ starting with our Number



Count backward by _____ starting with our Number



1	2	3	4	5	6	7	8	9	10
11	12	13	14	15	16	17	18	19	20
21	22	23	24	25	26	27	28	29	30
31	32	33	34	35	36	37	38	39	40
41	42	43	44	45	46	47	48	49	50
51	52	53	54	55	56	57	58	59	60
61	62	63	64	65	66	67	68	69	70
71	72	73	74	75	76	77	78	79	80
81	82	83	84	85	86	87	88	89	90
91	92	93	94	95	96	97	98	99	100
101	102	103	104	105	106	107	108	109	110
111	112	113	114	115	116	117	118	119	120